

NAME: _____

CLASS: _____

DIRECTIONS: Decode each word written in note heads on the treble staves. Then using the bass clef "code," rewrite each one in the bass clef. Can you figure out a system for relating treble and bass clefs?

The Code:

A musical staff with a bass clef. The notes are placed on the following lines and spaces from bottom to top: F (line 1), G (space 1), A (line 2), B (space 2), C (line 3), D (space 3), E (line 4), F (space 4), G (line 5), A (space 5), B (line 6), C (space 6).

1.

Musical staff 1: Treble clef with notes G, A, B, C. This is equal to a bass clef with notes F, G, A, B.

7.

Musical staff 7: Treble clef with notes D, E, F, G. This is equal to a bass clef with notes C, D, E, F.

2.

Musical staff 2: Treble clef with notes A, B, C, D. This is equal to a bass clef with notes G, A, B, C.

8.

Musical staff 8: Treble clef with notes E, F, G, A. This is equal to a bass clef with notes D, E, F, G.

3.

Musical staff 3: Treble clef with notes B, C, D, E, F. This is equal to a bass clef with notes A, B, C, D, E.

9.

Musical staff 9: Treble clef with notes C, D, E, F, G. This is equal to a bass clef with notes B, C, D, E, F.

4.

Musical staff 4: Treble clef with notes D, E, F, G, A. This is equal to a bass clef with notes C, D, E, F, G.

10.

Musical staff 10: Treble clef with notes E, F, G, A, B. This is equal to a bass clef with notes D, E, F, G, A.

5.

Musical staff 5: Treble clef with notes F, G, A, B, C. This is equal to a bass clef with notes E, F, G, A, B.

11.

Musical staff 11: Treble clef with notes G, A, B, C, D. This is equal to a bass clef with notes F, G, A, B, C.

6.

Musical staff 6: Treble clef with notes A, B, C, D, E, F. This is equal to a bass clef with notes G, A, B, C, D, E.


12.

Musical staff 12: Treble clef with notes B, C, D, E, F, G, A. This is equal to a bass clef with notes A, B, C, D, E, F, G.


In the following measures, write the correct letter names, and you will find that they make words.




(Write letter names. Watch note heads. Don't let stems confuse you.)




(Write letter names)



(Write letter names)



(Write letter names)



(Write letter names)



(Write letter names)